

Daily Plan for Thursday, February 25th

We have Teams meetings today at 8:30, 10:30, and 1:00.

Students also have small reading groups that meet from 9-10.

8:30 - Morning Meeting on Teams

- Show and Share: Shriya, Akiva, Anthea, Zoey, Eloise
- Reading strategies

9:00- Reading Centers- Each centre should take 15 minutes.


1. Small Reading Group Teams meeting.

- 9:00- Anthea, Nyabol, ,Eloise, Marcus, Zoey,
- 9:15- Autumn, Akiva, Hannah, Abby, Sadie
- 9:30- Grace, Guillermo, Kadlin
- 9:45- Bailey, Emma, Grey, Alec, Nathanael, Mara-Jade, Shriya


2. Read to self- Print books, online books.

<https://generalstewart2.weebly.com/february-reading.html>

3. Reading Comprehension Week 9 Day 4:



4. Nouns:



10:00- Snack and Movement Break

10:30- Math Lesson **Teams**

- Two-digit Subtraction

11:00- Math Work:

Look at the addends for each problem. Draw the tens and ones below the number sentence and write your answer for the addition sentence on the line.

23 + 4 = 27



51 + 7 = ___

98 + 1 = ___

22 + 5 = ___

67 + 3 = ___

74 + 3 = ___

12 + 2 = ___

Practice your addition and subtraction facts:

- Play a dice or card addition/subtraction game.
- Practice flash cards.
- Or Go to website and play addition and subtraction games.

<https://generalstewart2.weebly.com/february-math.html>

11:30 - Writing Time: Continue with your silly story. Complete the rough copy today and plan on editing and having a completed copy tomorrow.

12:00- Lunch and movement break

1:00- Science Lesson on **Teams**

- Thermometers
- How and Cold Temperatures
- Bring Paper and blank Thermometers to class.

THERMOMETER EXPERIMENT
Can you draw each cup?

Room Temperature	Hot Water	Cold Water
What is the temperature?	What is the temperature?	What is the temperature?

1. Did the red line go UP or DOWN in the hot water? _____

2. Did the red line go UP or DOWN in the cold water? _____

3. What had the highest number? CIRCLE ONE.
The hot one
The cold one

4. What is the temperature outside today? _____

1:30- Science Work:
Complete the sheet.

THERMOMETER EXPERIMENT
Can you draw each cup?

Room Temperature	Hot Water	Cold Water
What is the temperature?	What is the temperature?	What is the temperature?

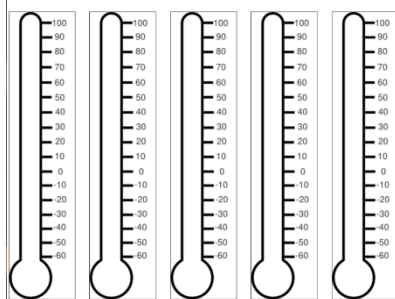
1. Did the red line go UP or DOWN in the hot water? _____

2. Did the red line go UP or DOWN in the cold water? _____

3. What had the highest number? CIRCLE ONE.
The hot one
The cold one

4. What is the temperature outside today? _____

Finish colouring the Thermometers:



Labeled; room temperature, freezing, boiling, today's temperature, Meteghan's temperature.

Time to Finish any work from the day and post to My Blueprint.

3:00- Exercise Time: Here are some ideas.

- Cosmic Yoga Fun:
<https://www.youtube.com/user/CosmicKidsYoga>
- Go Noodle Dance Fun:
<https://www.youtube.com/user/GoNoodleGames>
- Go outside and Play.

Checklist of items to be posted on MY BLUEPRINT

- Reading Comprehension week 9 day 4

- Person, place, or thing,
- Two-digit addition
- Thermometers - labeled room temperature, freezing, boiling, today's temperature, Meteghan's temperature.
- Thermometer Experiment sheet.